


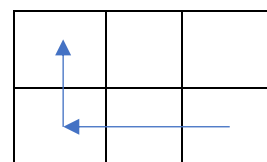

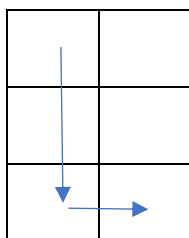
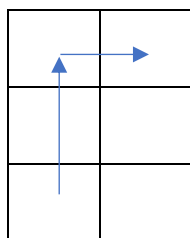
Problem 3 fir déi grouss Hiesercher:



De Mathemetty start um Feld A a spréngt, sou wéi d'Päerd um Schachbried:

2 Felder no vir an 1 no riets oder lénks

z.B.



Op all Feld op deem hien ukënnt, verstoppt hien ee faarwegt Ee.

Hie kann net op ee Feld sprangen, wou schon een Ee verstoppt ass.



Hie kann awer iwwer d'Eeër sprangen.

Gëtt et ee Wee, sou datt hien op all Feld een Ee hileeë kann an nees um Feld A ukënnt?

Wa jo, gëff de Wee un.

Wann nee, erklär firwat et net geet!

Fir ze probéieren:



Numm:

Virnumm:

Klass:

Kategorie: ☐ klengen Hieschen

☐ groussen Hieschen

☐ alen Hues

